

DOWNLOAD PDF DOCUMENT



ACCOUNTING CHAPTER 8 TE...

DOWNLOAD DOCUMENT NOW

Updated: 10/27/2017

DISCLAIMER:

CHAUVIN.CO uses the following accounting chapter 8 test answers book available for free PDF download which is also related with

ACCOUNTING CHAPTER 8 TEST ANSWERS

Our digital library offers you to download accounting chapter 8 test answers and other files in PDF format for free. There is no need to pay for registration, but you will have to pass it in order to get an unlimited access to the stock of eBooks. So, if you need accounting chapter 8 test answers, just follow the link below, pass the registration and enjoy reading accounting chapter 8 test answers or other books from almost any advice supporting PDF format. You may ask why we ask our users to pass registration. It is done to simplify the work of the library and prevent countless hackers' attacks that cause certain discomfort to the users of our digital library. You need to register only once in order to get an access to accounting chapter 8 test answers and other files. It will take you little time to register and then to download accounting chapter 8 test answers.

DOWNLOAD NOW

DOWNLOAD PDF DOCUMENT

DOWNLOAD PDF DOCUMENT

ACCOUNTING CHAPTER 8 TE...

[MICROSOFT WORD - CHAPTER 2 TEST REVIEW ANSWERS.DOCX](#)

Honors Geometry Chapter 2 Test Review Question Answers 1. Given: $BA \perp AT$ $(51 - x) + (y + 9) = 180$ Find: $m\angle MAT$ $y = 120 + x$ $(y + 9) + (x + y) = 90$ $B \perp x + 2y = 81$ $x + 2(120 + x) = 81$ $x + 240 + 2x = 81$ $3x = -159$ M $51 - x$ $y + 9$ N $x + y$ $x = -53$ $T \perp y = 120 + (-53) = 67$ $m\angle MAT = 180 - (x + y) = 180 - 14 = 166$ 2. A certain angle is 39 less than 2 times its complement. Find its supplement. $x = 2(90 - \dots$

File name: Chapter 2 Test Review Answers.pdf
[Download now or Read Online](#)

[MICROSOFT WORD - CHAPTER 11 TEST REVIEW QUESTION ANSWERS.DOCX](#)

Honors Geometry Chapter 11 Test Review Question Answers 1. Find the area of an equilateral triangle that has sides that measure 8 7 . $s^2 \cdot \frac{\sqrt{3}}{4}$ $Equ. = 4 (8 7)^2 \cdot \frac{\sqrt{3}}{4} = (112 \sqrt{3})$ 2. A rotor of a Wankel automotive engine has the geometric shape shown. The center of each arc is the opposite vertex of the equilateral triangle. a. Find the figure's area a. $A = A + 3(A_{segment})$ b. Find the figur...

File name: Chapter 11 Test Review Question Answers.pdf
[Download now or Read Online](#)

[EXAMVIEW - CHAPTER 14 TEST REVIEW- WILLIAMS.TST](#)

Name: Period: Date: K. Williams ID: A8th Grade Chapter 14 TEST REVIEW 1. Determine the volume of the cylinder. Use 3.14 for π . 2. Complete the table to identify the effect tripling the radius of a cylinder's base has on its volume. Cylinder radius Cylinder Area of Cylinder Height Cylinder Volume (cm) r Base (cm) $A = \pi r^2$ (cm) h (cm³) $V = \pi r^2 h$ 1 1 3 1 9 1 3. Identify the radius, diameter, and height ...

File name: ExamView - Chapter 14 Test Review- Williams.pdf
[Download now or Read Online](#)

[IB CHAPTER 8 TEST FORM 2A DO NOT WRITE ON TEST](#)

For any credit show all work on a separate sheet of paper for all problems. 13.14. IB Chapter 8 Test Free Response Name: Date; Per: Answer each question on a separate sheet of paper. For each problem do the following: a. Copy or draw a figure. Mark the figure up with the given information. b. Show all calculations. c. Make sure your final answer has the correct units. 1.2.3.4.5. 6. ????. Bonus: a.b. ...





















File name: Chapter 8 Test Form 2A including Free Response IB.pdf
[Download now or Read Online](#)

DOWNLOAD PDF DOCUMENT

DOWNLOAD PDF DOCUMENT

Here below another book similar with:

ACCOUNTING CHAPTER 8 TE...

-  [accounting chapter 8 test answers](#)
-  [managerial accounting exercises solutions chapter 3](#)
-  [cost accounting solutions chapter 11](#)
-  [accounting 15th edition solutions meigs chapter 8](#)
-  [chapter 4 de leon cost accounting](#)
-  [kieso intermediate accounting 15th edition solutions chapter 7](#)
-  [kieso intermediate accounting 14th edition chapter 8 solutions pdf](#)
-  [chapter 13 intermediate accounting solutions](#)
-  [pearson environmental science test answers chapter three](#)
-  [the solar system chapter test answers](#)
-  [chapter 13 genetic engineering test answers](#)
-  [foundations in personal finance test answers chapter 9](#)
-  [solutions holt modern chemistry chapter test answers](#)
-  [chapter 7 cardiovascular fitness test answers](#)
-  [chapter 7 test form 2c answers](#)
-  [holt environmental science assessment chapter test answers](#)
-  [holt mcdougal geography chapter 2 test answers](#)
-  [holt environmental science chapter 12 test answers](#)
-  [outer banks accounting audit test](#)
-  [south western accounting test answer keys](#)

DOWNLOAD PDF DOCUMENT